

# Varied Fluency

## Step 3: Round to the Nearest 100

### National Curriculum Objectives:

Mathematics Year 4: (4N4b) [Round any number to the nearest 10, 100 or 1,000](#)

### Differentiation:

**Developing** Questions to support rounding 3-digit numbers to the nearest 100 with the tens digit underlined. Numbers up to 1,000 used. Numbers represented using numerals. Conventional partitioning used.

**Expected** Questions to support rounding 3-digit numbers to the nearest 100. Numbers represented as numerals and words. Conventional partitioning used.

**Greater Depth** Questions to support rounding 3-digit numbers to the nearest 100. Numbers represented as numerals, words and Roman numerals. Unconventional partitioning used.

More [Year 4 Place Value](#) resources.

Did you like this resource? Don't forget to [review](#) it on our website.

## Round to the Nearest 100

1a. Round the numbers below and draw lines to match them to the nearest 100.

|              |     |
|--------------|-----|
| 4 <u>3</u> 3 | 200 |
| 1 <u>8</u> 7 | 300 |
| 4 <u>0</u> 1 | 400 |
| 3 <u>4</u> 5 | 500 |
| 4 <u>8</u> 0 |     |



VF

## Round to the Nearest 100

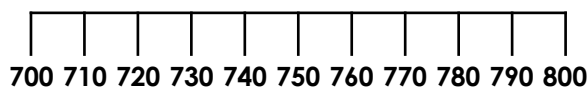
1b. Round the numbers below and draw lines to match them to the nearest 100.

|              |       |
|--------------|-------|
| 8 <u>6</u> 1 | 700   |
| 9 <u>8</u> 6 | 800   |
| 7 <u>2</u> 0 | 900   |
| 6 <u>5</u> 0 | 1,000 |
| 8 <u>1</u> 2 |       |



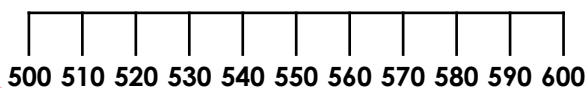
VF

2a. True or false?  
721 is closer to 700 than 800



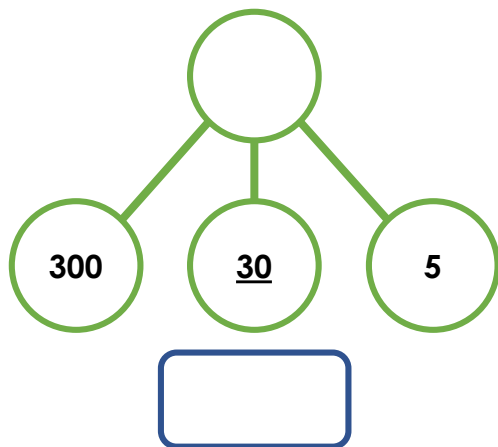
VF

2b. True or false?  
556 is closer to 500 than 600



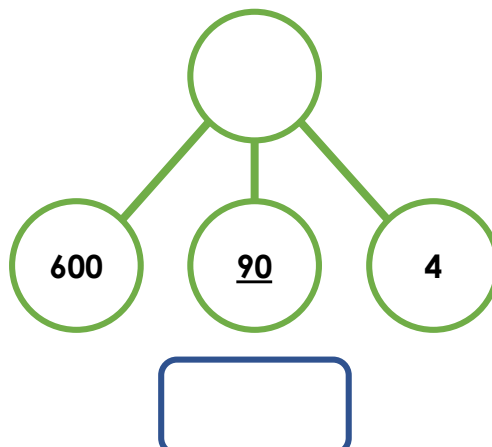
VF

3a. Complete the part whole model then round the number to the nearest 100.



VF

3b. Complete the part whole model then round the number to the nearest 100.



VF

4a. Complete the function machine by rounding each number to the nearest 100.



VF

4b. Complete the function machine by rounding each number to the nearest 100.



VF

## Round to the Nearest 100

5a. Round the numbers below and draw lines to match them to the nearest 100.

|                               |     |
|-------------------------------|-----|
| 263                           | 100 |
| One hundred and thirty-seven  | 200 |
| 97                            | 300 |
| 231                           | 400 |
| three hundred and seventy-one |     |



VF

## Round to the Nearest 100

5b. Round the numbers below and draw lines to match them to the nearest 100.

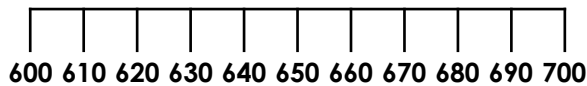
|                            |     |
|----------------------------|-----|
| five hundred and two       | 500 |
| 781                        | 600 |
| 489                        | 700 |
| seven hundred and three    | 800 |
| five hundred and fifty-two |     |



VF

6a. True or false?

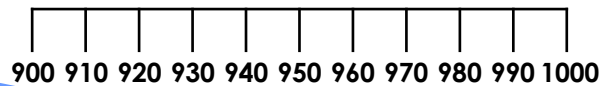
Six hundred and forty-eight is closer to 600 than 700



VF

6b. True or false?

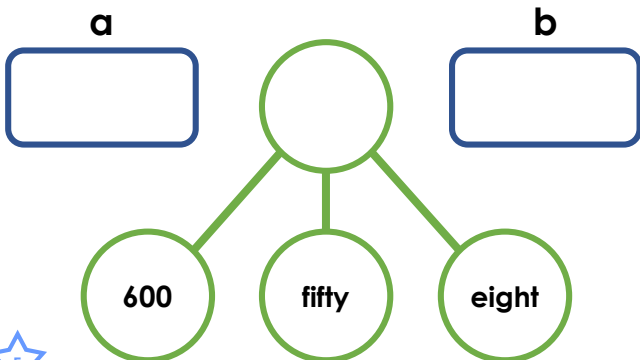
Nine hundred and forty-nine is closer to 900 than 1,000.



VF

7a. Complete the part whole model then:

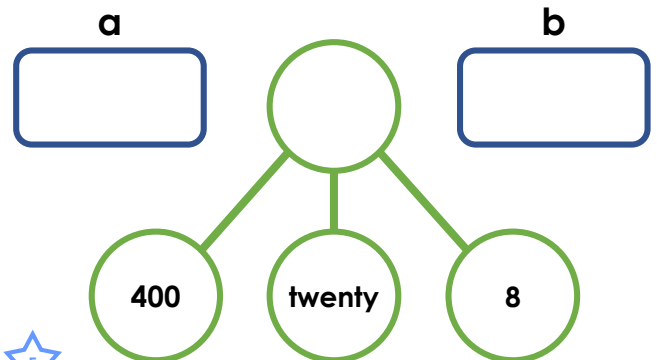
- round the number to the nearest 10
- round the number to the nearest 100



VF

7b. Complete the part whole model then:

- round the number to the nearest 10
- round the number to the nearest 100



VF

8a. Complete the function machine by rounding each number to the nearest 100.



VF

8b. Complete the function machine by rounding each number to the nearest 100.



VF

## Round to the Nearest 100

9a. Round the numbers below and draw lines to match them to the nearest 100.

|                             |     |
|-----------------------------|-----|
| LVII                        | 100 |
| three hundred and seventeen | 200 |
| 398                         | 300 |
| one hundred and sixty-two   | 400 |
| LV                          |     |



VF

## Round to the Nearest 100

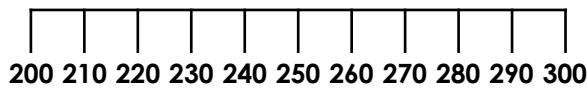
9b. Round the numbers below and draw lines to match them to the nearest 100.

|                              |       |
|------------------------------|-------|
| 803                          | 700   |
| nine hundred and ninety-nine | 800   |
| 738                          | 900   |
| 851                          | 1,000 |
| seven hundred and sixty-five |       |



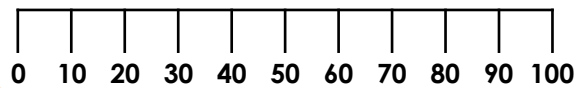
VF

10a. True or false?  
Two hundred and ninety-five is closer to 200 than 300



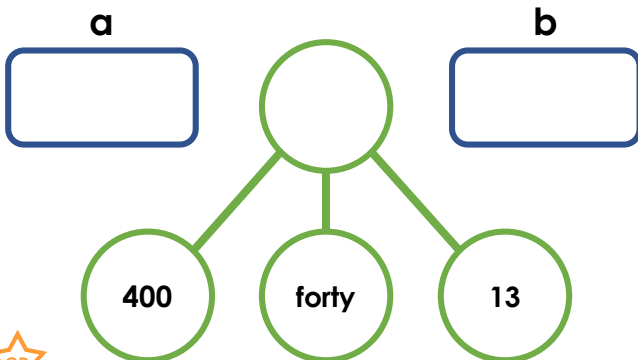
VF

10b. True or false?  
XCVI is closer to 0 than 100



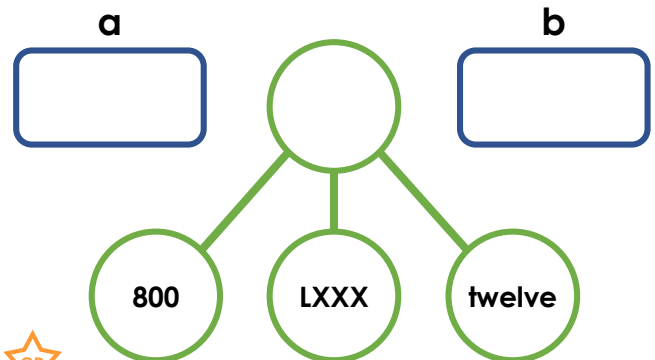
VF

11a. Complete the part whole model then:  
a. round the number to the nearest 10  
b. round the number to the nearest 100.



VF

11b. Complete the part whole model then:  
a. round the number to the nearest 10  
b. round the number to the nearest 100.



VF

12a. Complete the function machine by rounding each number to the nearest 100.



VF

12b. Complete the function machine by rounding each number to the nearest 100.



VF

**Varied Fluency**  
**Round to the Nearest 100**

**Developing**

- 1a. 400, 200, 400, 300, 500  
2a. True  
3a. 335 rounds down to 300.  
4a. 500

**Expected**

- 5a. 300, 100, 100, 200, 400  
6a. True  
7a. 658: a. 660, b. 700  
8a. 400

**Greater Depth**

- 9a. 100, 300, 400, 200, 100  
10a. False. 295 is closer to 300.  
11a. 453: a. 450, b. 500  
12a. 700

**Varied Fluency**  
**Round to the Nearest 100**

**Developing**

- 1b. 900, 1,000, 700, 700, 800  
2b. False. 556 is closer to 600.  
3b. 694 rounds up to 700.  
4b. 300

**Expected**

- 5b. 500, 800, 500, 700, 600  
6b. True  
7b. 428: a. 430, b. 400  
8b. 200

**Greater Depth**

- 9b. 800, 1,000, 700, 900, 800  
10b. False XCVI (96) is closer to 100.  
11b. 892: a. 890, b. 900  
12b. 200